

**Monday 23 June 2014 – Morning**

**GCSE TWENTY FIRST CENTURY SCIENCE  
PHYSICS A/FURTHER ADDITIONAL SCIENCE A**

**A183/01** Module P7 (Foundation Tier)


Candidates answer on the Question Paper.  
A calculator may be used for this paper.

**OCR supplied materials:**  
None

**Other materials required:**

- Pencil
- Ruler (cm/mm)

**Duration:** 1 hour




Candidate forename		Candidate surname	
--------------------	--	-------------------	--

Centre number						Candidate number				
---------------	--	--	--	--	--	------------------	--	--	--	--

**INSTRUCTIONS TO CANDIDATES**

- Write your name, centre number and candidate number in the boxes above. Please write clearly and in capital letters.
- Use black ink. HB pencil may be used for graphs and diagrams only.
- Answer **all** the questions.
- Read each question carefully. Make sure you know what you have to do before starting your answer.
- Write your answer to each question in the space provided. Additional paper may be used if necessary but you must clearly show your candidate number, centre number and question number(s).
- Do **not** write in the bar codes.

**INFORMATION FOR CANDIDATES**

- The quality of written communication is assessed in questions marked with a pencil (  ).
- A list of useful relationships is printed on pages 2 and 3.
- The number of marks is given in brackets [ ] at the end of each question or part question.
- The total number of marks for this paper is **60**.
- This document consists of **16** pages. Any blank pages are indicated.

## TWENTY FIRST CENTURY SCIENCE EQUATIONS

### Useful relationships

#### The Earth in the Universe

$$\text{distance} = \text{wave speed} \times \text{time}$$

$$\text{wave speed} = \text{frequency} \times \text{wavelength}$$

#### Sustainable energy

$$\text{energy transferred} = \text{power} \times \text{time}$$

$$\text{power} = \text{voltage} \times \text{current}$$

$$\text{efficiency} = \frac{\text{energy usefully transferred}}{\text{total energy supplied}} \times 100\%$$

#### Explaining motion

$$\text{speed} = \frac{\text{distance travelled}}{\text{time taken}}$$

$$\text{acceleration} = \frac{\text{change in velocity}}{\text{time taken}}$$

$$\text{momentum} = \text{mass} \times \text{velocity}$$

$$\text{change of momentum} = \text{resultant force} \times \text{time for which it acts}$$

$$\text{work done by a force} = \text{force} \times \text{distance moved in the direction of the force}$$

$$\text{amount of energy transferred} = \text{work done}$$

$$\text{change in gravitational potential energy} = \text{weight} \times \text{vertical height difference}$$

$$\text{kinetic energy} = \frac{1}{2} \times \text{mass} \times [\text{velocity}]^2$$

#### Electric circuits

$$\text{power} = \text{voltage} \times \text{current}$$

$$\text{resistance} = \frac{\text{voltage}}{\text{current}}$$

$$\frac{\text{voltage across primary coil}}{\text{voltage across secondary coil}} = \frac{\text{number of turns in primary coil}}{\text{number of turns in secondary coil}}$$

#### Radioactive materials

$$\text{energy} = \text{mass} \times [\text{speed of light in a vacuum}]^2$$

**Observing the Universe**

$$\text{lens power} = \frac{1}{\text{focal length}}$$

$$\text{magnification} = \frac{\text{focal length of objective lens}}{\text{focal length of eyepiece lens}}$$

$$\text{speed of recession} = \text{Hubble constant} \times \text{distance}$$

$$\text{pressure} \times \text{volume} = \text{constant}$$

$$\frac{\text{pressure}}{\text{temperature}} = \text{constant}$$

$$\frac{\text{volume}}{\text{temperature}} = \text{constant}$$

$$\text{energy} = \text{mass} \times [\text{speed of light in a vacuum}]^2$$

Answer **all** the questions.

1 Much of our knowledge about stars comes from the light we receive from the stars.

(a) (i) It is very useful to produce a spectrum of the light from a star.

Draw a labelled diagram to show how a prism can produce a spectrum from a beam of light.

[3]

(ii) What is the name of the process in the prism that causes the spectrum?

Put a ring around the correct answer.

**absorption**

**parallax**

**reflection**

**refraction**

[1]

(iii) What else can be used to produce a spectrum, other than a prism?

..... [1]

(b) The spectrum from a star can give important information about the star.

Complete the sentences about lines in a spectrum.

Choose the best words from the list.

**electrons**

**light**

**lines**

**neutrons**

**sound**

Dark lines in the spectrum are produced when ..... is absorbed.



Each element gives a different pattern of ..... in a star's spectrum.

[2]

(c) (i) The diagram shows the spectrum from a star



Use the spectra for the elements **A, B, C, D** shown below to work out which **two** elements are in the star.



Which **two** elements **A, B, C** or **D** are in the star?

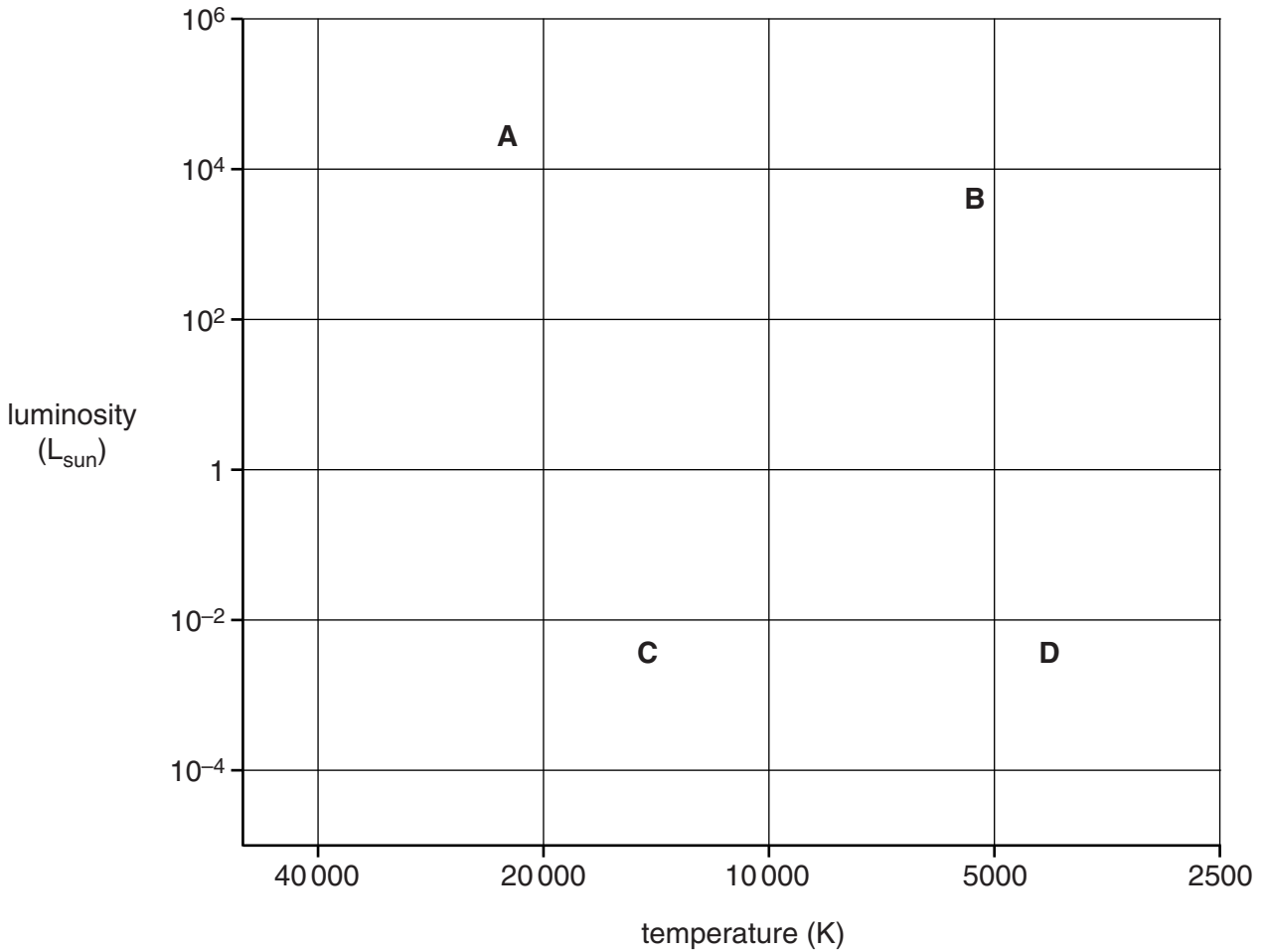
answer ..... and ..... [2]

(ii) What are the **names** of the two most common elements in a young star?

..... and ..... [2]

[Total: 11]

2 This question is about the Hertzsprung-Russell diagram.



(a) The Hertzsprung-Russell diagram above shows the temperature and brightness of four objects **A**, **B**, **C** and **D**.

Which object on the Hertzsprung-Russell diagram will be:

hottest and brightest? answer **A, B, C** or **D**? .....

coolest and dimmest? answer **A, B, C** or **D**? .....

[2]

(b) What type of object is the Hertzsprung-Russell diagram designed to show?

Put a ring around the correct answer.

**galaxies**

**moons**

**planets**

**stars**

[1]

(c) (i) The Sun has a temperature of about 5000 K and luminosity of 1 L<sub>sun</sub>.

Plot and label the position of the Sun on the Hertzsprung-Russell diagram above. [2]

(ii) The average temperature of the Earth is about 15 °C.

What is this temperature in kelvin (K)?

temperature = ..... K [2]

(iii) The Earth can not be plotted on this Hertzsprung-Russell diagram.  
Why not?

..... [1]

(d) **A**, **C** and **D** on the Hertzsprung-Russell diagram are stars.

Draw straight lines to connect the **stars** to the **type of star**.

**stars**

**A and D**

**C**

**type of star**

main sequence

red giant

supergiant

white dwarf

[2]

[Total: 10]







5 In recent years, scientists have observed things outside our solar system. These observations make them think it is more likely that life will be found outside our solar system.

(a) What have scientists observed and how do these observations make it more likely that life will be found outside the solar system?

.....  
.....  
.....  
..... [2]

(b) How many species of extraterrestrial life have scientists found?

..... [1]

[Total: 3]

6 Draw a labelled diagram to explain a **lunar** eclipse.

[3]

[Total: 3]

7 In the late 1700s, the Titius-Bode Law was published.

The law was used for calculating the distance of the planets from the Sun. The distance from the Earth to the Sun is 1 AU. This is what the law says:

To find the distance in AU:

- take the sequence of numbers 0, 3, 6, 12, 24, 48, 96, ... (each number after the first two is double the previous number)
- add 4 to each number in the sequence
- divide each number by 10 to give the distance.

Titius-Bode distance calculation in AU	Planet	Actual distance from Sun in AU
$(0 + 4)/10 = 0.4$	Mercury	0.39
$(3 + 4)/10 = 0.7$	Venus	0.72
$(6 + 4)/10 = 1.0$	Earth	1.00
$(12 + 4)/10 = 1.6$	Mars	1.52
$(48 + 4)/10 = 5.2$	Jupiter	5.20
$(96 + 4)/10 = 10$	Saturn	9.54

(a) Suggest why the Titius-Bode Law was only applied to the six planets out to Saturn in the first instance.

.....  
 ..... [1]

(b) Bode thought there should be a planet between Mars and Jupiter.

(i) Calculate the distance using the Titius-Bode Law.

distance = ..... AU [2]

(ii) In 1801, the astronomer Giuseppe Piazzi discovered a new (dwarf) planet, *Ceres*, at a distance of 2.77 AU from the Sun.  
 Does this support the Titius-Bode Law?  
 Explain why.

.....  
 ..... [1]

- (iii) Giuseppe Piazzi did not make enough observations to describe the orbit of *Ceres*. Other astronomers could not find the planet.

Why is it important that other astronomers observe the new planet?

.....

.....

..... [2]

(c) The table below gives the data for other more recently discovered planets.

Titius-Bode calculation of distance in AU	Planet	Actual distance from Sun in AU
$(192 + 4) / 10 = 19.6$	Uranus	19.18
$(384 + 4) / 10 = 38.8$	Neptune	30.06
$(768 + 4) / 10 = 77.2$	Pluto	39.44

Discuss how these results affect confidence in the Titius-Bode Law.

.....

.....

.....

.....

..... [4]

[Total: 10]



9 Ian is a young scientist at university. He reads about some research in a peer reviewed scientific journal.

(a) What is meant by 'peer reviewed'?

.....  
.....  
.....  
..... [2]

(b) The research measured the speed of recession of a galaxy. Ian's supervisor asks him to reproduce the results.

(i) Ian looks up the distance to the galaxy in a reference book and then calculates the speed of recession for the galaxy using the Hubble constant.  
distance to galaxy = 2000 Mpc  
Hubble constant = 70 km/s per Mpc

Calculate the speed of recession of the galaxy.

speed of recession = ..... km/s [2]

(ii) Ian's results agree with the published research. However Ian's supervisor tells him that he has not reproduced the results. What is the problem with Ian's method?

.....  
..... [1]

[Total: 5]

END OF QUESTION PAPER

15  
BLANK PAGE

PLEASE DO NOT WRITE ON THIS PAGE

**PLEASE DO NOT WRITE ON THIS PAGE**



**Copyright Information**

OCR is committed to seeking permission to reproduce all third-party content that it uses in its assessment materials. OCR has attempted to identify and contact all copyright holders whose work is used in this paper. To avoid the issue of disclosure of answer-related information to candidates, all copyright acknowledgements are reproduced in the OCR Copyright Acknowledgements Booklet. This is produced for each series of examinations and is freely available to download from our public website ([www.ocr.org.uk](http://www.ocr.org.uk)) after the live examination series.

If OCR has unwittingly failed to correctly acknowledge or clear any third-party content in this assessment material, OCR will be happy to correct its mistake at the earliest possible opportunity.

For queries or further information please contact the Copyright Team, First Floor, 9 Hills Road, Cambridge CB2 1GE.

OCR is part of the Cambridge Assessment Group; Cambridge Assessment is the brand name of University of Cambridge Local Examinations Syndicate (UCLES), which is itself a department of the University of Cambridge.